

BASANT VALLEY PUBLIC SCHOOL




WORKSHEET - EVS

WINTER BREAK


CLASS – 2ND

Q.1. Look at the following picture and name them –









Q.2. Fill in the blanks –

1) A model of the earth is called a

2) The surface of the earth has two parts – land &

3) The air surrounding our earth is called

4) It is cool during summer on the

5) We wear _____ special occasion.

6) Umbrellas & _____ protect us from rain.

7) We wear _____ clothes in winter.

8) We wear _____ clothes in summer.

Q.3. Match the following –

- | | |
|---------------|-------------------|
| 1) Winter | a) rain coats |
| 2) summer | b) woolen clothes |
| 3) rains | c) cotton clothes |
| 4) high land | d) desert |
| 5) sandy land | e) plain |

Q.4. Circle the odd one –

- 1) Car, bus, scooter, bicycle
- 2) bullock-cart, tonga, train, cycle

Q.5. Answer the following questions –

1) What do you mean by rivers?

2) Why do we wear clothes?

3) When earth day is celebrated?

4) Name two means of air, water and land transport.

5) What are desert?

6) What is necessary for life on Earth?

BASANT VALLEY PUBLIC SCHOOL



WORKSHEET - HINDI

WINTER BREAK

CLASS – 2ND

प्र 1. सर्वनाम शब्द छाँटकर खाली स्थान भरो।

1. स्कूल जा रहा हूँ। (मैं/ हम)
2. एक केला चाहिए। (तुम्हारा/ मुझे)
3. घर में चार कमरे हैं। (मेरे/अपने)
4. खेल रही है। (तुम/वह)

प्र 2. खाली स्थान में सही विशेषण भरिए।

(मीठा, पाँच, एक, छोटा)

1. उसका घर है।
2. मेरे घर में कूलर है।
3. मुझे खाना पसंद है।
4. रामसाल का है।

प्र 3. क्रिया शब्द पर गोला लगाओ।

1. रीमा मिठाई खा रही है।
2. हम घूमने जाएँगे।
3. राम दौड़ता है।

4. बच्चा दूध पीता है।

प्र 4. विलोम शब्द लिखो।

1. गरीब

2. नया

3. चढना

4. प्रश्न

5. महंगा

6. ऊपर

प्र 5. मेरी अध्यापिका पर अनुच्छेद लिखो।

.....

.....

.....

.....

.....

.....

.....

.....

.....

.....

पाठमाला

प्र 1. निम्नलिखित शब्दों के अर्थ लिखो।

1. अचानक

2. कार्यक्रम

3. उदास

4. निर्माण

5. इनाम

6. उपहार

प्र 2. निम्न प्रश्नों के उत्तर लिखो।

1. जलपरी ने सबसे पहले कौन सी कुल्हाड़ी नदी से निकाली ?

.....

2. चाचा जी ने मीनू को क्या दिया ?

.....

3. मीनू जयपुर में कहाँ – कहाँ घूमने गई ?

.....



BASANT VALLEY PUBLIC SCHOOL

WORKSHEET - ENGLISH

WINTER BREAK

CLASS – 2ND

Q.1. Make sentences –

1) Crawling

2) Crying

3) Shouting

4) Talking

Q.2. Give meanings –

1) tremble

2) agreed

3) crush

4) boomed

5) curious

6) scared

7) Wriggle

8) Shrink

Q.3. Say True or False –

- 1) The baby elephant was always asking questions. ()
- 2) The crocodile caught him by his little nose. ()
- 3) Bugs, butterflies and caterpillars. ()
- 4) It was the elephant who sent the caterpillar out of the cave. ()
- 5) The cave belongs to a rabbits. ()

Q.4. Answer the following of your own.

1) Where does the lion live?

2) Who occupied the rabbit's cave?

3) Which animal did the rabbit approach for help?

4) Where did the crocodile live?

Worksheet – 2

Grammar

Q.1. Fill in the blanks with – is, am, are – ing.

- 1) She

 (climb) the stairs.
- 2) Ramu

 (kick) the ball.
- 3) They

 (sit) on the benches.

Q.2. Fill in the blanks with simple past tense

- 1) We

 (go) to Delhi yesterday.
- 2) They

 (come) back from London.
- 3) We

 (buy) a new house last year.

Q.3. Fill in the blanks with (in, on, behind)

- 1) A clock is hung

 the wall
- 2) Our pens are

 the bag.
- 3) A park is

 our school.

Q.4. Join the sentences with (and, but, or)

- 1) Reena's hair is long. Reena's hair is curly.

- 2) I like stitching. I don't like knitting.

- 3) I use a pen to write. I also use a pencil to write.



BASANT VALLEY PUBLIC SCHOOL

WORKSHEET - MATHS

WINTER BREAK

CLASS – 2ND





Q.1. Fill in the blanks –

- 1) A cube has _____ vertices, _____ edges & _____ faces.
- 2) A sphere has a _____ surface.
- 3) A cone has one _____, face & one _____ face.
- 4) 1 kg = _____ g
- 5) 1L = _____ ml
- 6) A square has _____ sides.
- 7) A circle has _____ corners.
- 8) A triangle has _____ sides.

Q.2. Draw different shapes & colour them.

- 1) Triangle
- 2) Cone
- 3) Square

Q.3. Look at the clock & write correct time in both the ways.



Q.4. Answer the following questions –

- 1) Which day comes in between Monday & Wednesday?
- 2) Independence Day fall in which month?
- 3) Which is the ninth month of a year?
- 4) Which season comes in between sharada & Hemanta?
- 5) Which season comes after hemanta?

Q.5. Add the following –

$$\begin{array}{r} 1) \quad 6 \quad 2 \quad 6\text{ml} \\ + \quad 7 \quad 0 \quad 2\text{ml} \\ \hline \\ \hline \end{array}$$

$$\begin{array}{r} 2) \quad \text{L} \quad \text{ml} \\ \quad 962 \quad 213 \\ + \quad 102 \quad 103 \\ \hline \\ \hline \end{array}$$

$$\begin{array}{r} 3) \quad \text{L} \quad \text{ml} \\ \quad 92 \quad 02 \\ + \quad 10 \quad 30 \\ \hline \\ \hline \end{array}$$

$$\begin{array}{r} 4) \quad \text{L} \quad \text{ml} \\ \quad 613 \quad 10 \\ + \quad 23 \quad 10 \\ \hline \\ \hline \end{array}$$

Q.6. Subtract –

$$\begin{array}{r} 1) \quad \text{L} \quad \text{ml} \\ \quad 960 \quad 190 \\ - \quad 350 \quad 281 \\ \hline \\ \hline \end{array}$$

$$\begin{array}{r} 2) \quad \text{L} \quad \text{ml} \\ \quad 500 \quad 600 \\ - \quad 200 \quad 390 \\ \hline \\ \hline \end{array}$$

$$\begin{array}{r} 4) \quad 9 \quad 6 \quad 0\text{L} \\ + \quad 3 \quad 0 \quad 2\text{L} \\ \hline \\ \hline \end{array}$$

$$\begin{array}{r} 4) \quad 9 \quad 2 \quad 4\text{L} \\ + \quad 6 \quad 1 \quad 3\text{L} \\ \hline \\ \hline \end{array}$$

